

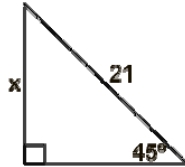
Trigonometry Caching

Name _____

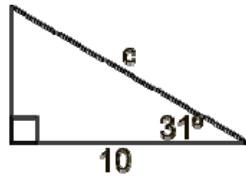
Answer Sheet: Show all work. There is a printable "Certificate" in the last box. To start, go to <http://mathbits.com/caching/trigopencache1.html>

Box 1:

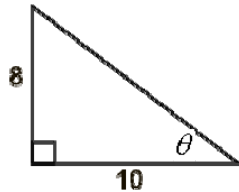
1. Find x to the *nearest tenth*:



2. Find c to the *nearest tenth*.



3. Find theta to the *nearest degree*.



Box 2:

1. 3.

2. 4.

Box 3:

1.

2.

3.

Box 4:

1.

2.

3.

4.

5.

Box 5:

- 1.
- 2.
- 3.
- 4.

Box 7:

- 1.
- 2.
- 3.

Box 6:

- 1.
- 2.
- 3.

Box 8:

- | | |
|----|----|
| 1. | 2. |
| 3. | 4. |
| 5. | |

Box 9:

1.

2.

3.

Box 10: Complete this URL of the winning box!
http://mathbits.com/caching/T_____.html

Remember that there is a printable “Certificate”.